
Workshop #1: Measurements & Conversions

1. Round the following numbers to THREE significant figures, and express your final responses using scientific notation.

A. 239,720 _____ C. 0.000238505 _____
B. 0.09763400 _____ D. 7,689,994,656 _____

2. Round the following numbers to FOUR significant figures, and express your final responses using scientific notation.

A. 0.00765796 _____ C. 423.56 _____
B. 56,928.31 _____ D. 0.0000555226 _____

3. Solve each of the following problems. Express your final answer to the correct number of significant figures in scientific notation. Make certain to include the appropriate units where appropriate.

A. $382.5 \text{ mL} + 96.31 \text{ mL} - 5.9 \text{ mL}$ _____

B. $\frac{3.496 \text{ ft} + 27.22 \text{ ft}}{5.006 \text{ lb}}$ _____

C. $\frac{(2.661 \times 10^{-3} \text{ cm})(5.11 \times 10^9 \text{ cm})}{7.3 \times 10^7 \text{ cm}}$ _____

D. $\frac{28.62 \text{ s} - 3.5 \text{ s}}{(32.9 \times 10^2 \text{ s})(99.55 \times 10^6 \text{ s})}$ _____

E. $\frac{(6.345 \times 10^{-17})(2.6447 \times 10^{-45})}{4.567 \times 10^5 + 7.89887 \times 10^6}$ _____

4. Solve the following problems, conforming to the appropriate number of significant figures. You may need your textbook for certain unit conversions:

A. _____ How many centimeters are there in 3.0 miles?

B. _____ Convert $9.06 \times 10^6 \mu\text{m}^2$ to mm^2 .

Name: _____

Section: _____

- C. _____ Convert 45 meters per second to kilometers per hour.
- D. _____ Determine the density (in g/mL) of a substance that weighs 0.695 lb and occupies a volume of 3.4 qt.
- E. _____ The concentration of carbon monoxide (CO), a common air pollutant, is found in a room to be $5.7 \times 10^{-3} \text{ mg / cm}^3$. How many grams of CO are present in the room if the room's dimensions measure $3.5 \text{ m} \times 3.0 \text{ m} \times 3.2 \text{ m}$?
- F. _____ A cylindrical piece of metal is 2.03 inches high, has a diameter of 17.0 mm wide, and weighs 31.599 g. Determine its density. Will this object sink or float in water? Volume (cylinder) = $\pi r^2 h$
- G. _____ Zinc sulfide is treated with sulfuric acid, resulting in a solution with some undissolved bits of zinc sulfide and releasing hydrogen sulfide gas. If 10.85 g of zinc sulfide is treated with 50.00 mL of sulfuric acid (density = 1.153 g / mL), 65.15 g of solution plus undissolved solid remain. What is the volume (in L) of hydrogen sulfide gas evolved from this reaction? The density of hydrogen sulfide gas is 1.393 g / L.

5. *APPLICATION!* Nanotechnology, the field of building microscale structures one atom at a time, has progressed in recent years. One potential application of nanotechnology is the construction of artificial cells. The simplest cells could mimic red blood cells, the body's oxygen transporters. For example, nanocontainers, perhaps constructed of carbon, could be pumped full of oxygen and injected into a person's bloodstream. If the person needed additional oxygen, these containers could slowly release oxygen into the blood, allowing tissues that would otherwise die to remain alive. Suppose that nanocontainers were cubic and had an edge length of 25 nanometers.
- A. _____ What is the volume (in L) of one nanocontainer?
- B. _____ Suppose that each nanocontainer could contain pure oxygen pressurized to a density of 85 g / L. How many grams of oxygen could be contained by each nanocontainer?
- C. _____ Normal air contains about 0.28 g of oxygen per liter. An average human inhales about 0.50 L of air per breath and takes about 20 breaths per minute. How many grams of oxygen does a human inhale per hour?
- D. _____ What is the minimum number of nanocontainers that a person would need in their bloodstream to provide 1.0 hour's worth of oxygen?

Name: _____

Section: _____

Use the SDS provided in lab to answer the following questions:

1. List other names that are synonyms of sodium hydroxide and its formula.
2. What is its melting point?
3. What is done in case of contact with eyes?
4. How should a small spill be handled?
5. What procedure should be done if the substance is swallowed?
6. What are the NFPA Ratings for Health? Fire? Reactivity? Specific Hazard?
7. List three chemicals that should not be stored with NaOH.
8. How should solid NaOH be properly stored?

Name: _____

Section: _____

Your instructor will assign you a specific chemical compound along with SDS, and you should fill-in the table below with as much information as possible (note: several areas will remain blank) using the various resources listed below:

Name of Substance _____

Chemical Formula _____

	Reagent Bottle	SDS Sheet	Merck Index	CRC or Lange's
Other Names				
Formula Weight				
State of matter				
Melting point				
Boiling point				
Density				
Percent Composition				
Soluble solvents				
Manufacturer				
Chemical Properties				
Toxicity				

Contrast the differences between the four reference materials used above, and be specific.

Name: _____

Section: _____

Workshop #3: Nomenclature

A. Provide a chemical name for the following formulas:

1. CuSO_3 _____

2. Hg_2Cl_2 _____

3. BaCr_2O_7 _____

4. NO _____

5. $\text{Sr}(\text{OH})_2$ _____

6. $\text{Mn}(\text{NO}_2)_2$ _____

7. NaHCO_3 _____

8. $\text{HNO}_3(\text{aq})$ _____

9. CsClO_2 _____

10. Ag_3PO_3 _____

11. $\text{V}_2(\text{CrO}_4)_5$ _____

12. $\text{Sn}(\text{MnO}_4)_4$ _____

13. I_2O_7 _____

Name: _____

Section: _____

B. Provide a formula for the following names:

1. sodium peroxide _____

2. copper(II) sulfate pentahydrate _____

3. ammonia _____

4. sulfurous acid _____

5. calcium hydride _____

6. ammonium hydrogen phosphate _____

7. arsenic(III) sulfate _____

8. dichlorine heptoxide _____

9. gold(I) iodide _____

10. antimony(III) nitride _____

11. tin(IV) carbonate _____

12. bismuth(III) oxide _____

13. mercury(II) perchlorate _____

14. pentane _____

Name: _____

Section: _____

C. Provide a chemical name for the following formulas:

1. $\text{HC}_2\text{H}_3\text{O}_2(\text{aq})$ _____

2. PbC_2O_4 _____

3. $\text{Au}(\text{ClO})_3$ _____

4. $\text{Cd}(\text{SCN})_2$ _____

5. CuMnO_4 _____

6. KIO_3 _____

7. ClO_2 _____

8. TiH_4 _____

9. $\text{HCl}(\text{g})$ _____

10. $\text{As}(\text{HSO}_4)_3$ _____

11. SO_3 _____

12. $\text{Fe}(\text{OH})_2$ _____

13. $\text{CH}_3\text{CH}_2\text{CH}_2\text{CH}_3$
(i.e. C_4H_{10}) _____

14. $\text{CH}_3(\text{CH}_2)_6\text{CH}_3$
(i.e. C_8H_{18}) _____

Name: _____

Section: _____

D. Provide a formula for the following names:

1. tungsten(V) phosphide _____

2. gallium nitrate _____

3. carbonic acid _____

4. xenon hexachloride _____

5. hydrosulfuric acid _____

6. lithium dihydrogen phosphite _____

7. nonane _____

8. lead(IV) oxalate _____

9. phosphoric acid _____

10. dinitrogen tetroxide _____

11. sodium selenate _____

12. sodium bicarbonate _____

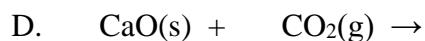
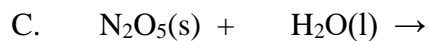
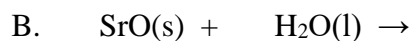
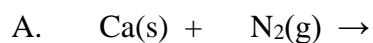
13. hypobromous acid _____

14. zinc oxide _____

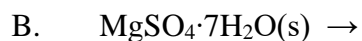
Workshop #4: Reactions

Predict products and balance the following reactions (write total-ionic and net-ionic where requested). If no reaction takes place, write NR for no reaction. Be sure to include phases.

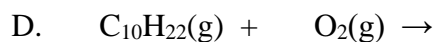
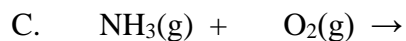
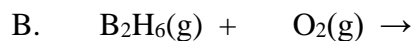
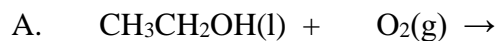
1. Synthesis (Combination or Composition) Reactions: $A + B \rightarrow AB$

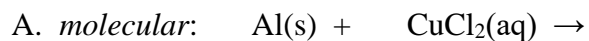
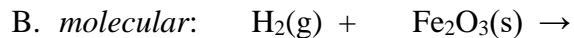
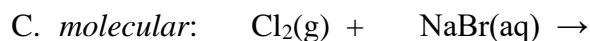
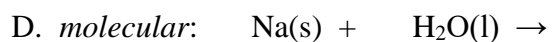
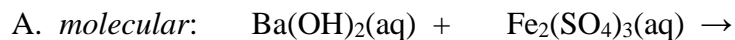
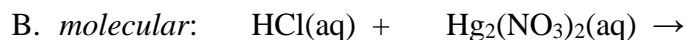


2. Decomposition Reactions: $AB \rightarrow A + B$



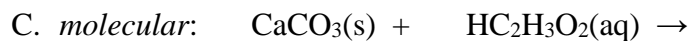
3. Combustion Reactions: *nonmetals* + $\text{O}_2 \rightarrow$ *nonmetal oxides*: H_2O , CO_2 , SO_2 , NO_2



4. Single Replacement (Displacement) Reactions: $C + AB \rightarrow AC + B$ OR $CB + A$ *total-ionic:**net-ionic:**total-ionic:**net-ionic:**total-ionic:**net-ionic:**total-ionic:**net-ionic:*5. Double Replacement (Displacement) Reactions: $AB + CD \rightarrow AD + CB$ *total-ionic:**net-ionic:**total-ionic:**net-ionic:*

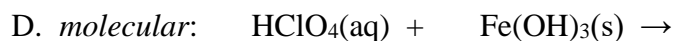
Name: _____

Section: _____



total-ionic:

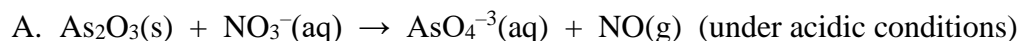
net-ionic:



total-ionic:

net-ionic:

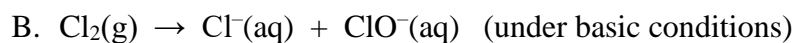
6. Redox (Oxidation-Reduction) Reactions:



Oxidation half reaction:

Reduction half reaction:

Balanced reaction:



Oxidation half reaction:

Reduction half reaction:

Balanced reaction:

Name: _____

Section: _____

Workshop #5: Stoichiometry

Show calculation setups and answers for all problems below.

1. How many molecules are there in a 600.0 g sample of $\text{Na}_3\text{PO}_4(\text{s})$? How many Na^+ ions are present?

2. A compound of copper and sulfur was produced in the lab by heating copper and sulfur together in a crucible. The following data was collected:

Mass of crucible and cover	28.71 g
Mass of crucible, cover, and copper	30.25 g
Mass of crucible, cover, and copper-sulfur compound	30.64 g

Determine the empirical formula of this compound.

3. Isopentyl acetate ($\text{C}_7\text{H}_{14}\text{O}_2$), the compound responsible for the scent of bananas, can be produced commercially. Calculate the percent composition of $\text{C}_7\text{H}_{14}\text{O}_2$.

Name: _____

Section: _____


4. A compound consisting of mainly cetyl palmitate is comprised entirely of carbon, hydrogen, and oxygen. Combustion of a 2.3836 g sample of cetyl palmitate produced 6.9807 g of CO_2 and 2.8575 g of H_2O . Determine the empirical formula of the compound. If the formula weight of the compound is 480.9 g/mol, what is the molecular formula of this compound?
5. Washing soda, a compound used to prepare hard water for laundry, is a hydrate whose formula can be written as $\text{Na}_2\text{CO}_3 \cdot x\text{H}_2\text{O}$. When a 2.558 g sample of washing soda is heated at 125 °C, all the water of hydration is lost, leaving behind 0.948 g of the anhydrous salt. Determine the value of x .

6. Liquid mercury and bromine gas will react under appropriate conditions to produce solid mercury(II) bromide.
- Write the balanced chemical equation for this process.
 - What is the maximum mass of HgBr_2 that can be produced from the reaction of 10.0 g Hg and 9.00 g Br_2 ?
 - Determine the remaining mass of each reactant (if any) available upon conclusion of the reaction.
 - If 15.3 g of mercury(II) bromide is produced in this reaction, determine the percentage yield of product.
7. Silicon nitride (Si_3N_4), a valuable ceramic, is made by the direct combination of silicon and nitrogen at high temperature.
- Write the balanced chemical equation for this process.
 - How many grams of silicon must react with excess nitrogen to prepare 125 g silicon nitride if the yield of the reaction is 85.0%?

Name: _____

Section: _____

8. Consider the following unbalanced reaction:

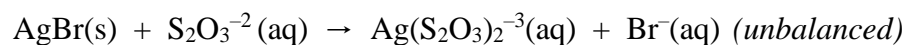


If 30.8 g of CaCl_2 produced 79.6 g of XCl , determine the identity of X. Quantify your response. Random guessing will not earn any credit for this problem!

Name: _____

Section: _____

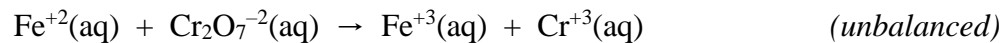
5. The concentration of hydrogen peroxide in a solution is determined by titrating a 10.0 mL sample of the solution with permanganate ion under acidic conditions, producing manganese(II) ion and oxygen gas. If it takes 13.5 mL of 0.109 M MnO_4^- solution to reach the equivalence point, what is the molarity of the hydrogen peroxide solution?
6. A flask contains 49.8 mL of 0.150 M calcium hydroxide solution. How many milliliters of 0.350 M sodium carbonate are required to react completely with the calcium hydroxide?
7. During the developing process of black and white film, silver bromide is removed from photographic film by the fixer. The major component of the fixer is sodium thiosulfate. What mass of silver bromide can be dissolved by 1.00 L of 0.200 M sodium thiosulfate?



Name: _____

Section: _____

8. A 3.33 gram sample of iron ore is transformed to a solution of iron(II) sulfate, and this solution is titrated with 0.150 M potassium dichromate. If it required 41.4 mL of potassium dichromate solution to titrate the iron(II) sulfate solution, what is the percentage of iron in the ore?



Workshop #7: Gas Laws

Show calculation setups and answers for all problems below.

1. A particular balloon is designed by its manufacturer to be inflated to a volume of no more than 2.5 L. The balloon is filled with 2.0 L of helium at sea level (pressure = 1.00 atm), is released, and rises to an altitude at which the atmospheric pressure is only 500.0 mmHg. Assuming that the temperature remains constant, will the balloon burst? Quantify your response and briefly explain.
2. Another balloon is filled with 150 L of helium at 23 °C and 1.0 atm. What volume does the balloon have when it has risen to a point in the atmosphere where the pressure is 220 mmHg and the temperature is -31 °C?
3. Calculate the mass of hydrogen gas needed to fill an 80.0 L tank to a pressure of 2205 psi at 27 °C.
4. What volume does 35 mol of nitrogen gas occupy at STP?
5. The mass of a 3.21 L gas is found to be 3.50 g, measured at 65.0 °C and 500.0 torr. Determine the molar mass of the gas.

Name: _____

Section: _____

6. Calculate the density of water vapor at 110 °C and 99 kPa.

7. A compound with the empirical formula BH_3 was found to have a vapor density of 1.24 g / L at STP. Determine the molecular weight AND the molecular formula of this gas.

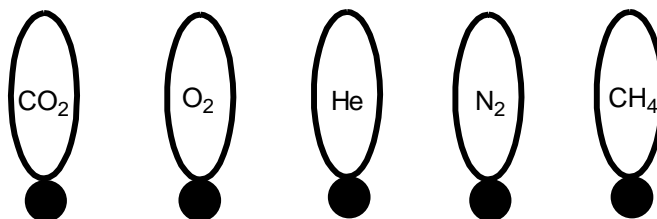
8. Consider the reaction of solid copper(I) sulfide with oxygen gas to produce solid copper(I) oxide and gaseous sulfur dioxide.
 - A. Write the balanced chemical equation for this process.

 - B. What volume of oxygen gas, measured at 27.5 °C and 0.998 atm, is required to react with 25 g of copper(I) sulfide?

9. A sample of solid potassium chlorate is decomposed, forming solid potassium chloride and gaseous oxygen. The oxygen produced was collected by displacement of water at 22 °C at a total pressure of 754 torr. The volume of the gas collected was 0.65 L, and the vapor pressure of water at 22 °C is 21 torr.
 - A. Write the balanced chemical equation for this process.

 - B. Determine the mass of potassium chlorate in the sample that was decomposed.

10. Represented below are five identical balloons, each filled to the same volume at 25 °C and 1.0 atm pressure with the pure gases indicated.



- A. Which balloon contains the greatest mass of gas? Explain.
- B. Compare the average kinetic energies of the gas molecules in the balloons. Explain.
- C. Which balloon contains the gas that would be expected to deviate most from the behavior of an ideal gas? Explain.
- D. Twelve hours after being filled, all the balloons have decreased in size. Predict which balloon will be the smallest. Explain your reasoning.
11. Calculate the root-mean-square speed (u_{rms}) for:
- A. a xenon atom at 298 K;
- B. an oxygen molecule at 298 K.
12. Both hydrogen and helium have been used as buoyant gases in blimps. If a small leak were to occur in a blimp filled with both gases, which gas would effuse more rapidly and by what factor?

Name: _____

Section: _____

13. A gas of unknown molecular mass was allowed to effuse through a small opening under constant pressure conditions. It required 72 s for the gas to effuse. Under identical experimental conditions, it required 28 s for O₂ gas to effuse. Determine the molar mass of the unknown gas.

14. Calculate the pressure exerted by 50.0 g CO(g) in a 1.00 L container at 25 °C by:

Useful information: For CO, $a = 1.49 \text{ atm L}^2/\text{mol}^2$ and $b = 0.0399 \text{ L/mol}$

A. using the ideal gas law, and

B. using the van der Waals equation.

15. Compare the results from parts A and B. Does CO(g) behave ideally under these conditions? Briefly explain why or why not.

Workshop #8: Thermochemistry

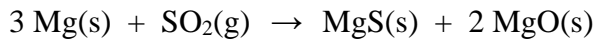
Show calculation setups and answers for each question. *Please note that your instructor may opt to assign specific questions from those listed below.*

1. Calculate the change in internal energy (in J) for a balloon that is heated by adding 215 cal of heat. It expands, doing 422 J of work on the atmosphere.
2. Consider the following *balanced* reaction: $\text{CH}_3\text{OH}(\text{g}) \rightarrow \text{CO}(\text{g}) + 2\text{H}_2(\text{g})$, where $\Delta H = +90.7$ kJ. If the enthalpy change is 16.5 kJ, how many grams of hydrogen gas are produced?
3. A 50.00 g sample of an unknown substance absorbed 2.578 kJ of energy as it changed from a temperature of 25.0 °C to 89.7 °C. What is the specific heat of this unknown substance (in J/g °C)?
4. An alloy of mass 25.0 g was heated to 88.6 °C and then placed in a calorimeter that contained 61.2 g of water at 19.6 °C. The temperature of the water rose to 21.3 °C. Determine the specific heat of the alloy (in J/g °C).
5. 100.0 g of copper metal, initially at 100.0 °C, is added to a calorimeter containing 250.0 g of H₂O at 15.0 °C. If the specific heat of copper is 0.389 J/g °C, what is the final temperature of the water and copper mixture?

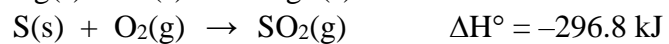
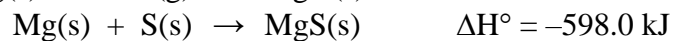
Name: _____

Section: _____

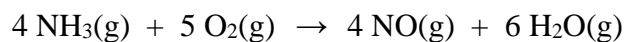
6. The chemical equation for the combustion of magnesium in sulfur dioxide is



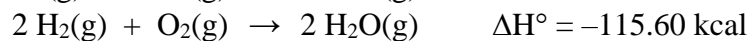
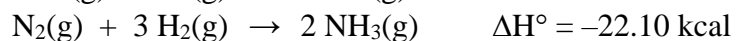
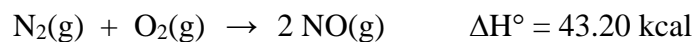
Calculate the $\Delta H^\circ_{\text{rxn}}$ (in kJ) given the following thermodynamic data:



7. Consider the following thermochemical equation:



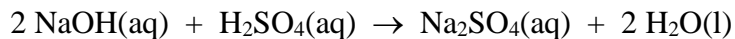
Determine the $\Delta H^\circ_{\text{rxn}}$ (in kcal) given the following thermochemical data:



Name: _____

Section: _____

8. Consider the neutralization reaction of sodium hydroxide and sulfuric acid in a coffee-cup calorimeter.



100.0 mL of 1.00 M aqueous NaOH is mixed with 100.0 mL of 1.00 M aqueous H₂SO₄, each at 24.0 °C, were mixed. The maximum temperature achieved was 30.6 °C. Calculate the enthalpy change of reaction (in kJ/mol) of Na₂SO₄ produced. The specific heat of the reaction is known to be 4.184 J/g °C. The density of the reaction mixture is 1.00 g/mL. Assume the volumes are additive.

9. Suppose 50.0 mL of HCl is combined with 100.0 mL of 1.05 M NaOH in a coffee-cup calorimeter. The reaction mixture, initially at 22.0 °C, reached a final temperature of 30.2 °C. Determine the molarity of the HCl solution assuming all of the HCl reacted and that NaOH is present in excess. The specific heat of the reaction is known to be 0.96 cal/g °C, and the heat of neutralization is 13.6 kcal/mol. The density of the reaction mixture is 1.02 g/mL. Assume the volumes are additive.

The simplest atomic spectrum is that of the *hydrogen atom*. In 1886, Balmer showed that the lines in the spectrum of the hydrogen atom had wavelengths that could be expressed by a rather simple equation. In 1913, Bohr explained the spectrum on a theoretical basis with his famous model of the hydrogen atom. According to Bohr's theory, the energies E_n allowed to a hydrogen atom are all given by the following equation:

$$E_n = \frac{-B}{n^2} \quad (2)$$

where B is the constant, 2.178×10^{-18} J and n is an integer, 1, 2, 3, ..., called a quantum number. It has been found that all the lines in the atomic spectrum of hydrogen can be associated with differences between atomic energy levels which are predicted with great accuracy by Bohr's equation.

There are several ways in which one might analyze an atomic spectrum, given the energy levels of the atom, but a simple and powerful method is to calculate the wavelengths of some of the lines that are allowed and see if they match those which are observed. We shall use this method in our workshop.

A. Energy Levels of Hydrogen

Given the expression for E_n in Equation 2, calculate the energy (in joules) for each of the levels of the H atom missing in the table below. Notice that the energies are all negative, so that the lowest energy will have the largest allowed negative value. Enter these values in the table of energy levels below:

Table One

Quantum Number	Energy, E_n , in joules	Quantum Number	Energy, E_n , in joules
1	-2.178×10^{-18} J	6	
2		7	
3		8	
4		10	-2.178×10^{-20} J
5		∞	ZERO Joules

(Workshop continued on next page)

B. Calculation of Wavelengths in the Spectrum of the Hydrogen Atom

The lines in the hydrogen spectrum all arise from jumps made by the atom from one energy level to another. The wavelengths in nanometers of these lines can be calculated by Equation 1, where $|\Delta E|$ is the positive difference in energy between any two allowed levels. By rearranging Equation 1 it is possible to solve for wavelengths:

$$\lambda = \frac{hc}{|\Delta E|} \quad (3)$$

After putting in some constants we can solve for wavelength in nanometers.

$$\lambda = \frac{(6.626 \times 10^{-34} \text{ J}\cdot\text{sec})(3.00 \times 10^8 \text{ m / sec})}{|\Delta E|} \times \frac{1 \text{ nm}}{10^{-9} \text{ m}} \quad (4)$$

Calculate the $|\Delta E|$ and wavelength for all the jumps indicated in the table below. Write $|\Delta E|$, the difference in energy in J between $E_{n,hi}$ and $E_{n,lo}$, in the upper half of the box, and in the lower half of the box, write the λ (in nm) associated with that value. The box for the $n_2 \rightarrow n_1$ transition is filled in for you.

Table Two

n_{higher} n_{lower}	6	5	4	3	2	
1					1.634×10^{-18}	$ \Delta E $ (J)
					121.6	λ (nm)
2					$ \Delta E $ (J)	
					λ (nm)	
3				$ \Delta E $ (J)		
				λ (nm)		
4			$ \Delta E $ (J)			
			λ (nm)			
5		$ \Delta E $ (J)				
		λ (nm)				

(Workshop continued on next page)

C. Assignment of Wavelengths

Compare the wavelengths you have calculated in Table Two with those listed in Table Three. You should notice that many wavelengths match within the error of your calculation. Fill in the quantum numbers of the upper and lower states for each line whose origin you can recognize by comparison of your calculated values with the observed values. Several wavelengths will not match at all; place those in Table Four and estimate the expected $n_{hi} \rightarrow n_{lo}$ following the trends. Note that Table Two only covers transitions with n_{hi} less than or equal to six. Check your estimations by solving for ΔE and wavelengths as you did on Table Two using n_{hi} numbers greater than six.

Table Three

Wavelength	$n_{hi} \rightarrow n_{lo}$	Wavelength	$n_{hi} \rightarrow n_{lo}$	Wavelength	$n_{hi} \rightarrow n_{lo}$
97.25		410.17		1,005.0	
102.57		434.05		1,093.8	
121.57	$2 \rightarrow 1$	486.13		1,281.8	
388.91		656.28		1,875.1	
397.01		954.62		4,050.0	

Table Four: Wavelengths you cannot assign using Table Two data

Observed Wavelength (in nm)	Predicted transition $n_{hi} \rightarrow n_{lo}$	Calculated ΔE (in J)	Calculated Wavelength λ (in nm)
388.91			

(Workshop continued on next page)

D. The Balmer Series

When Balmer formulated his famous series for hydrogen in 1886, he was limited experimentally to wavelengths for the visible and near ultraviolet regions from 250 nm to 700 nm. All the lines in his series lie in this wavelength range. All transitions in the Balmer Series have $n_{\text{final}} = 2$.

1. What would be the longest POSSIBLE wavelength for a line in the Balmer Series?

_____ nm

2. What would be the shortest POSSIBLE wavelength for a line in the Balmer Series?

_____ nm

In a normal hydrogen atom, the electron is in the *lowest* energy state. The maximum energy of an electron in the hydrogen atom is 0 J, at which point the electron is in the $n = \infty$ state, essentially removed from the atom. At this point, ionization has occurred.

3. How much energy in joules does it take to ionize the hydrogen atom?

_____ J

4. The ionization energy you have calculated is for one electron in a single hydrogen atom. Calculate the ionization energy for one mole of H atoms.


SHOW CALCULATIONS:

_____ kJ / mole


(Workshop continued on next page)

E. Energy Levels of Hydrogen Atom

Show each of the first six lowest energy states in the chart below using the values from Table One. Draw horizontal lines for each level and identify them by writing its quantum number on the right side. Use vertical arrows to show the electron transitions calculated in Table Three.

**F. Hydrogen Line Spectra**

Draw the line spectra for hydrogen as it would appear in the visible region showing the lines calculated in Table Three within the Balmer Series.



Workshop #10: Quantum Mechanics and Chemical Periodicity

Many important facts and laws in chemistry are experimentally determined, and then rationalized in terms of a theory or artificial concept. The Periodic Law is one of these. It is based on experiment and rationalized in terms of structural concepts. This form of the Periodic Table may be explained on the basis of the order in which the electrons occupy the various energy levels. Actually, the Periodic Table is based on experiment and serves as a guide to the order in which electron-filling of shells takes place.

A relationship between the *s*, *p*, *d*, and *f* orbitals and the Periodic Table may be observed by noting that the long form of the table can be divided into blocks. One of the blocks is two elements wide, another six elements wide, a third ten elements wide, and a fourth is fourteen elements wide, respectively. Specific sections of each period and each period in the table arise from the filling of orbitals of roughly equal energy.

1. For the first problem, complete the following table for the main group elements:

Group Number	IA	IIA	IIIA	IVA	VA	VIA	VIIA	VIIIA
Number of valence electrons				4				
Electronic configuration of valence electrons. Omit principle quantum number.				s^2p^2				
Common oxidation states.				± 4				

(Workshop continued on next page)

Name: _____

Section: _____

2. For the next problem, consider the chart below, which represents the main group (representative elements) portion of the Periodic Table.

A. Several trends in atomic properties are listed to the sides and below the chart. Convert the lines into arrows by adding arrow heads to each line to indicate the direction of each trend (i.e. \rightarrow or \leftarrow).

B. In each box, write the electronic configuration of all the valence electrons for that element. Example: see the box containing element 84 (polonium)

	IA	IIA	IIIA	IVA	VA	VIA	VIIA	VIIIA or 0	
<u>Nonmetallic Properties Increase</u> <u>Atomic Radii Increase</u>	3	4	5	6	7	8	9	10	<u>Electronegativity Increases</u> <u>Ionization Energy Increases</u>
	11	12	13	14	15	16	17	18	
	19	20	31	32	33	34	35	36	
	37	38	49	50	51	52	53	54	
	55	56	81	82	83	84 $6s^2 6p^4$	85	86	
	87	88							

Metallic Properties Increase

Atomic Radii Increase

Ionization Energy Increases

Electronegativity Increases

(Workshop continued on next page)

Name: _____

Section: _____

3. In each square shown below, write the principal quantum number and orbital letter of the expected last electron to enter the atom in its ground state. For this exercise, ignore the exceptions. (*Four of them have been done for you.*)

	IA 1	II A 2											III A 13	IV A 14	V A 15	VI A 16	VII A 17	VIII A 18	
1	1																		2
2	3	4											5	6	7	8	9	10	
3	11	12	III B 3	IV B 4	V B 5	VI B 6	VII B 7	---VIII B --- 8	9	10	I B 11	II B 12	13	14	15	16	17	18	
4	19	20	21	22	23	24	25	26	27	28	29	30 <i>3d</i>	31	32	33	34	35	36	
5	37	38	39	40	41	42	43	44	45	46	47	48	49	50	51	52 <i>5p</i>	53	54	
6	55	56 <i>6s</i>	57	72	73	74	75	76	77	78	79	80	81	82	83	84	85	86	
7	87	88	89	104	105	106	107	108	109	110	111	112	113	114	115	116	117	118	

6	58	59	60	61	62	63	64	65	66 <i>4f</i>	67	68	69	70	71
7	90	91	92	93	93	95	96	97	98	99	100	101	102	103

4. A. Fill in the following table:

Quantum number l	0			3
Orbital Designation		p	d	

B. What m_l values are possible for the d orbitals?

C. What m_s values are possible?

Name: _____

Section: _____

5. Determine the quantum numbers for all six electrons in the $4p$ sublevel.

Electron	n	l	m_l	m_s
$4p^1$				
$4p^2$				
$4p^3$				
$4p^4$				
$4p^5$				
$4p^6$				

6. For the sets of quantum numbers below, identify its electron configuration (if possible). If not possible, explain what is wrong.

n	l	m_l	m_s	electron configuration or explanation of problem
2	0	-1	$-\frac{1}{2}$	_____
4	2	1	$-\frac{1}{2}$	_____
2	0	0	$+\frac{1}{2}$	_____
5	-1	1	0	_____

7. Determine the maximum number of electrons contained in:

A. d sublevel _____ B. valence (outer) shell _____

C. a single orbital _____ D. energy level $n = 4$ _____

8. Write FOUR isoelectronic species for the Al^{+3} ion, two cations and two anions.

9. Identify the elements which have no electron with the quantum number $l = 1$.

Name: _____

Section: _____

10. Consider the bismuth (Bi) atom.

A. Write the complete (start with 1s) and shortened (noble gas in brackets) electronic configuration for bismuth. Make certain to place brackets around the closed shell (core) electrons and identify valence electrons and pseudo-core electrons.

B. Draw the orbital diagram for all of the electrons in Bi.

C. Is Bismuth paramagnetic or diamagnetic?

D. Write the set of quantum numbers describing only valence electrons in Bi.

E. Write the shortened electronic configuration for the bismuth ions below:

Bi^{+3} ion _____ Bi^{+5} ion _____

Name: _____

Section: _____

11. A. Calculate the wavelength (in nm) of light with frequency 2.31×10^{14} Hz.

B. Visible light has wavelengths between 400 to 700 nm. Slightly longer wavelengths are infrared (IR) and shorter are ultraviolet (UV). Is electromagnetic radiation from 2.31×10^{14} Hz found to be IR, Vis, or UV?

12. A. Solve for the wavelength (in nm) caused by a hydrogen electron jumping from $n = 6$ to $n = 3$.

B. Is this photon in the visible, IR, or UV portion of the spectrum?

C. What is the frequency (in s^{-1}) for this photon?

D. Calculate the energy of this photon in both J/photon and in kJ/mol.

13. The compound known as Sunbrella, which is the active ingredient in some sunscreens, absorbs strongly around 266 nm. What is the frequency of the absorption (in MHz)?

Name: _____

Section: _____

14. For the last problem, fill in the following table for the various chemical species

Species	Short electronic configuration	“Short” Orbital Diagram	Quantum numbers of last e ⁻	Configuration of valence electrons	Common oxidation state(s)
O	[He] 2s ² 2p ⁴	He] $\begin{array}{c} \uparrow\downarrow \\ 2s \end{array} \quad \begin{array}{c} \uparrow\downarrow \\ 2p \end{array} \quad \begin{array}{c} \uparrow \\ 2p \end{array} \quad \begin{array}{c} \uparrow \\ 2p \end{array}$	2, 1, -1, 1/2	2s ² 2p ⁴	-2
Si					
K					
Sr					
Cr					Varies
Mn					Varies
Ga					
As					
Mo ⁺²					N/A
Fe ⁺³					N/A
Ag ⁺					N/A

Workshop #11: Intermolecular Forces

For the first part of this workshop, identify the type of crystal structure (Ionic, Molecular Polar, Molecular Nonpolar, Network-Covalent, or Metallic) present. Then determine the type of binding forces present in each (Ionic Bonds, Covalent Bonds, Metallic Bonds, London Dispersion Forces, Dipole Forces, and/or Hydrogen Bonds).

Substance	Type of Crystal	Type of Binding Force(s)
Ar		
CH ₃ Cl		
CH ₃ OH		
BCl ₃		
CH ₃ OCH ₃		
HF		
Hg		
KCl		
N ₂		
SiC		
CH ₃ COOH		
Diamond		

Name: _____ Section: _____

Circle the species with the higher boiling point and *briefly* justify your choice below.

1) Kr _____ or Xe _____
Justification:

2) C₂H₅OH _____ or CH₃OCH₃ _____
Justification:

3) NaF _____ or MgO _____
Justification:

4) N₂ _____ or NO _____
Justification:

5) CH₄ _____ or SiH₄ _____
Justification:

6) HF _____ or HI _____
Justification:

7) CO₂ _____ or NH₃ _____
Justification:

8) CH₄ _____ or CCl₄ _____
Justification:

9) Cr _____ or Si _____
Justification:

10) H₂O _____ or SiO₂ _____
Justification:

11) MgO _____ or BaO _____
Justification:

12) CH₃CH₂CH₂CH₂CH₃ _____ or (CH₃)₂CHCH₂CH₃ _____
Justification:

Workshop #12: Vapor Pressure

The stronger the intermolecular forces that exist between liquid molecules, the less likely they will escape into the vapor phase. Boiling point (which you explored in Workshop #11) and vapor pressure are both good measures of intermolecular forces. In the following problem set, you will analyze some provided “experimental” data in order to calculate the vapor pressure of a liquid.

Vapor pressure is defined as the pressure of a vapor that is in equilibrium with its liquid. It is controlled by 2 factors:

1. temperature – the higher the temperature, the greater kinetic energy the liquid molecules possess; therefore, they vaporize more readily, hence increasing the vapor pressure.
2. molar heat of vaporization, ΔH_{vap} – the energy required to change a liquid to a gas at its boiling point. The stronger the intermolecular forces, the harder it is to pull liquid molecules apart, and therefore the higher its ΔH_{vap} , which decreases its vapor pressure.

The Clausius-Clapeyron Equation relates the three quantities vapor pressure, ΔH_{vap} , and temperature according to the equation:

$$\ln \text{VP} = -\frac{\Delta H_{\text{vap}}}{RT} + B$$

Notice this equation fits the slope-intercept form $y = mx + b$, so if $\ln \text{VP}$ is plotted against $1/T$, a straight line results with $-\Delta H_{\text{vap}}/R$ as the slope. You will use this equation and the provided “experimental” data to calculate an unknown liquid’s ΔH_{vap} and its boiling point at a particular temperature. Consider the following:

	Temperature, t, (in °C)	Heights of Manometer Mercury Levels (in mm)		Vapor Pressure (in mmHg or torr)
		<u>open to atm</u>	<u>atm + VP trapped on gas side</u>	
1.	1.2	250	228	_____
2.	21.1	265	205	_____
3.	40.0	297	142	_____
4.	Boiling Point: 76 °C		Barometric Pressure: 752 torr	

Name: _____

Section: _____

Now fill in the following table to prepare for the graph:

t, °C	T, Kelvin	1 / T, K ⁻¹	VP, mmHg	ln VP
1.2				
21.1				
40.0				

Graph ln VP vs. 1 / T on Microsoft Office Excel[®] (see Experiment #2 in this lab manual for directions on using Excel[®]). According to the Clausius-Clapeyron equation, the slope is equal to $-\Delta H_{\text{vap}} / R$. Using $R = 8.314 \times 10^{-3} \text{ kJ / mole}\cdot\text{K}$, calculate ΔH_{vap} for the liquid:

$$\text{slope} = \Delta y / \Delta x = \Delta(\ln \text{VP}) / \Delta(1/T) = \text{_____} = -\Delta H_{\text{vap}} / R \text{ (rearrange to solve for } \Delta H_{\text{vap}})$$

SHOW CALCULATION:

$$\text{Therefore, } \Delta H_{\text{vap}} = \text{_____} \text{ kJ / mole}$$

From the graph, you can also calculate what the liquid's boiling point should be at the "experimental" barometric pressure. Recall that boiling point is the temperature where the vapor pressure is equal to the atmospheric pressure.

"Experimental" barometric pressure _____ mmHg
(= the VP needed for boiling)

ln (barometric pressure) _____

1 / T at this vapor pressure _____ K⁻¹ (from the graph)

T at this pressure _____ K

t at this pressure _____ °C (= the predicted boiling point)

"Experimental" boiling point _____ °C

Make sure to submit your properly labeled graph when submitting this Workshop!

Workshop #13: Colligative Properties

Show calculation setups and answers for all problems below.

1. List the following aqueous solutions in the order of expected DECREASING FREEZING POINT: 0.075 *m* glucose; 0.075 *m* LiBr; 0.030 *m* Zn(NO₃)₂.
2. The normal freezing point of pure naphthalene is measured to be 80.29 °C. When 32.21 g of the nonelectrolyte urea (CH₄N₂O) is dissolved in 751.36 g of naphthalene, the freezing point is measured to be 75.34 °C. What is the molal freezing point depression constant (K_f) for naphthalene?
3. When 132.0 g of C₆H₆ ($P^\circ = 93.96$ torr) and 147.0 g of C₂H₄Cl₂ ($P^\circ = 224.9$ torr) are combined, what is the total vapor pressure of the ideal solution?
4. Calculate the freezing point of a solution of 22.0 g of carbon tetrachloride dissolved in 800.0 g of benzene ($K_f = 5.12$ °C / *m*; normal freezing point = 5.5 °C).
5. What mass of NiSO₄·6H₂O must be dissolved in 500. g of water to produce 0.33 *m* NiSO₄(aq)?

Name: _____

Section: _____

6. What is the normal boiling point of an aqueous solution that has a freezing point of $-1.04\text{ }^{\circ}\text{C}$?

Note: For water, $K_f = 1.86\text{ }^{\circ}\text{C}/m$; $K_b = 0.512\text{ }^{\circ}\text{C}/m$

7. Assuming complete dissociation, calculate the freezing point of a $0.100\text{ }m$ aqueous solution of K_2SO_4 (ignore any interionic attractions).

Note: For water, $K_f = 1.86\text{ }^{\circ}\text{C}/m$

8. When 2.25 g of an unknown nonelectrolyte was dissolved in $150.\text{ g}$ of cyclohexane, the boiling point increased by 0.481 K . Determine the molar mass of the compound.

Note: $K_b(\text{cyclohexane}) = 2.79\text{ K}/m$

9. A 0.50 g sample of *immunoglobulin G*, a nonvolatile nonelectrolyte, is dissolved in enough water to make 0.100 L of solution, and the osmotic pressure of the solution at $25\text{ }^{\circ}\text{C}$ is found to be 0.619 torr . Calculate the molecular mass of *immunoglobulin G*.

10. When 2.74 g of phosphorus is dissolved in 100.0 mL of carbon disulfide, the boiling point is 319.71 K. Given that the normal boiling point of pure carbon disulfide is 319.30 K, its density is 1.261 g / mL, and its boiling-point elevation constant is $K_b = 2.34 \text{ K} / m$, determine the molar mass of phosphorus.
11. A solution of biphenyl ($\text{C}_{12}\text{H}_{10}$), a nonvolatile nonelectrolyte, in benzene has a freezing point of 5.4 °C. Determine the osmotic pressure of the solution at 10 °C if its density is 0.88 g / cm³.
Note: normal freezing point (benzene) = 5.5 °C; $K_f = 5.12 \text{ °C}/m$
12. Consider these two solutions: Solution A is prepared by dissolving 5.00 g of MgCl_2 in enough water to make 0.250 L of solution, and Solution B is prepared by dissolving 5.00 g of KCl in enough water to make 0.250 L of solution. Which direction will solvent *initially* flow if these two solutions are separated by a semipermeable membrane?
13. Assuming that the volumes of the solutions described in question #12 are additive and ignoring any effects that gravity may have on the osmotic pressure of the solutions, what will be the *final* volume of solution A when the net solvent flow through the semipermeable membrane stops?